

Name the Country!

- | | | | |
|----------|----------|----------|----------|
| 1 _____ | 15 _____ | 29 _____ | 43 _____ |
| 2 _____ | 16 _____ | 30 _____ | 44 _____ |
| 3 _____ | 17 _____ | 31 _____ | 45 _____ |
| 4 _____ | 18 _____ | 32 _____ | 46 _____ |
| 5 _____ | 19 _____ | 33 _____ | 47 _____ |
| 6 _____ | 20 _____ | 34 _____ | 48 _____ |
| 7 _____ | 21 _____ | 35 _____ | 49 _____ |
| 8 _____ | 22 _____ | 36 _____ | 50 _____ |
| 9 _____ | 23 _____ | 37 _____ | 51 _____ |
| 10 _____ | 24 _____ | 38 _____ | 52 _____ |
| 11 _____ | 25 _____ | 39 _____ | 53 _____ |
| 12 _____ | 26 _____ | 40 _____ | 54 _____ |
| 13 _____ | 27 _____ | 41 _____ | 55 _____ |
| 14 _____ | 28 _____ | 42 _____ | |

Name the Countries of Africa!

(ANSWERS)

- | | | | |
|---------------|------------------------|-----------------------|---|
| 1 Morocco | 15 Guinea-Bissau | 29 Congo | 43 Zimbabwe |
| 2 Algeria | 16 Guinea | 30 Dem. Rep. of Congo | 44 Botswana |
| 3 Tunisia | 17 Sierra Leone | 31 Uganda | 45 Namibia |
| 4 Libya | 18 Liberia | 32 Ethiopia | 46 South Africa |
| 5 Egypt | 19 Ivory Coast | 33 Djibouti | 47 Lesotho |
| 6 Eritrea | 20 Ghana | 34 Somalia | 48 Swaziland |
| 7 Sudan | 21 Burkina Faso | 35 Kenya | 49 Madagascar |
| 8 Chad | 22 Togo | 36 Tanzania | 50 Seychelles |
| 9 Niger | 23 Benin | 37 Rwanda | 51 Equatorial Guinea |
| 10 Mali | 24 Nigeria | 38 Burundi | 52 Comoros |
| 11 Mauritania | 25 Cameroon | 39 Angola | 53 Mauritius |
| 12 Cape Verde | 26 Sao Tome & Principe | 40 Zambia | 54 * Western Sahara
<i>occupied by Morocco</i> |
| 13 Senegal | 27 Central Africa Rep. | 41 Malawi | 55 South Sudan |
| 14 Gambia | 28 Gabon | 42 Mozambique | |

Europe

Asia

This country cropped for space considerations



Name the Country!

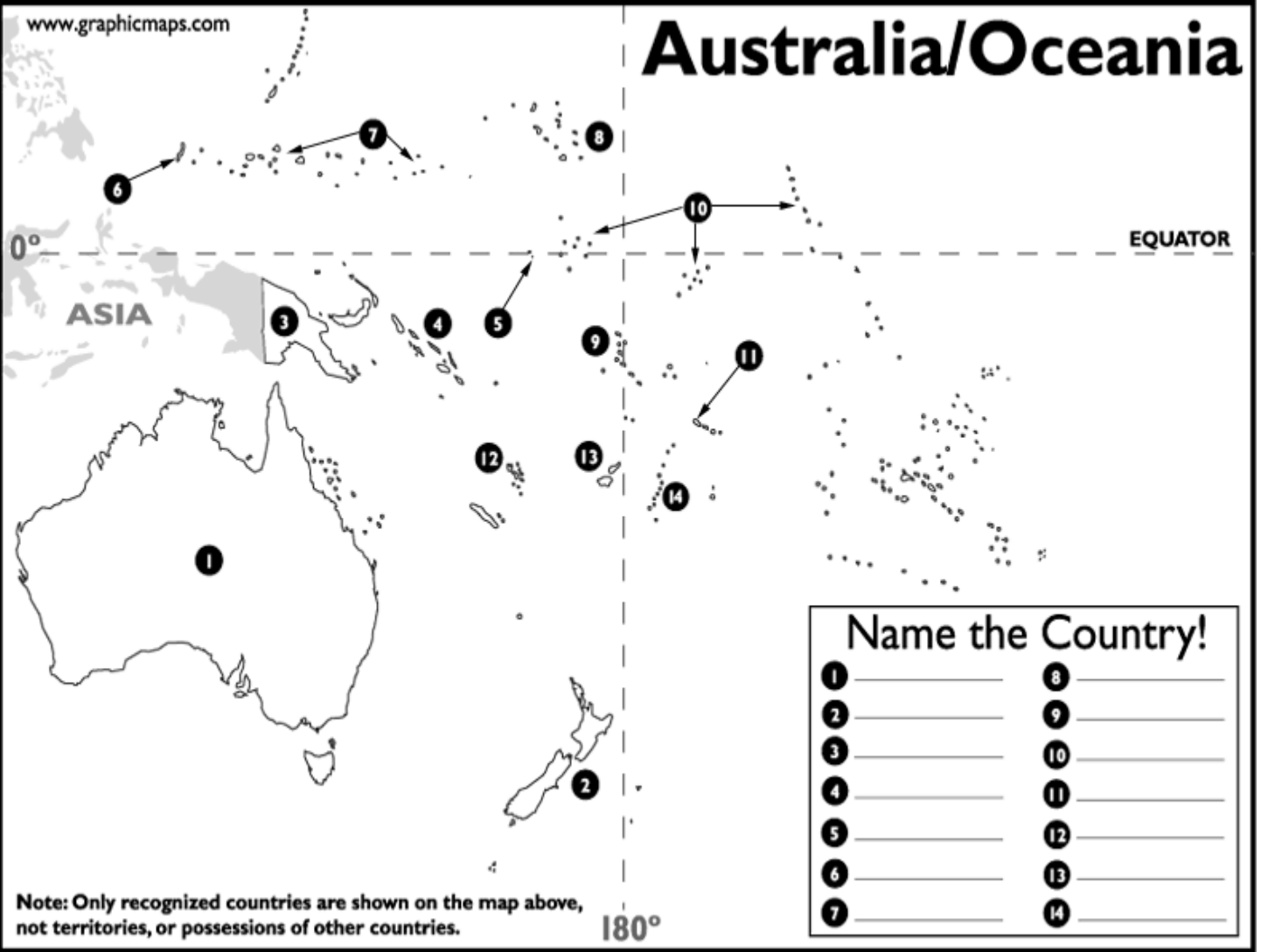
- | | | | |
|----------|----------|----------|----------|
| 1 _____ | 13 _____ | 25 _____ | 37 _____ |
| 2 _____ | 14 _____ | 26 _____ | 38 _____ |
| 3 _____ | 15 _____ | 27 _____ | 39 _____ |
| 4 _____ | 16 _____ | 28 _____ | 40 _____ |
| 5 _____ | 17 _____ | 29 _____ | 41 _____ |
| 6 _____ | 18 _____ | 30 _____ | 42 _____ |
| 7 _____ | 19 _____ | 31 _____ | 43 _____ |
| 8 _____ | 20 _____ | 32 _____ | 44 _____ |
| 9 _____ | 21 _____ | 33 _____ | 45 _____ |
| 10 _____ | 22 _____ | 34 _____ | 46 _____ |
| 11 _____ | 23 _____ | 35 _____ | 47 _____ |
| 12 _____ | 24 _____ | 36 _____ | |

Name the Countries of Asia! (ANSWERS)

- | | | | |
|------------------------|-----------------------|--------------------|---------------|
| 1 Turkey | 15 Turkmenistan | 29 Bhutan | 43 Malaysia |
| 2 Lebanon | 16 Uzbekistan | 30 Bangladesh | 44 Singapore |
| 3 Israel | 17 Kazakhstan | 31 Burma (Myanmar) | 45 Indonesia |
| 4 Jordan | 18 Russian Federation | 32 China | 46 Brunei |
| 5 Saudi Arabia | 19 Kyrgyzstan | 33 Mongolia | 47 East Timor |
| 6 Kuwait | 20 Tajikistan | 34 North Korea | |
| 7 United Arab Emirates | 21 Afghanistan | 35 South Korea | |
| 8 Qatar | 22 Iran | 36 Japan | |
| 9 Yemen | 23 Bahrain | 37 Taiwan | |
| 10 Oman | 24 Pakistan | 38 Philippines | |
| 11 Syria | 25 India | 39 Vietnam | |
| 12 Iraq | 26 Maldives | 40 Cambodia | |
| 13 Hong Kong | 27 Sri Lanka | 41 Laos | |
| 14 Macau | 28 Nepal | 42 Thailand | |

GEOGRAPHY NOTES:
Turkey and Russia are part of both the European and Asian Continents. Hong Kong and Macau are now administrative regions of China. China considers Taiwan to still be a part of China, while the UN and others consider Taiwan to be an independent nation. Finally, we now include Armenia, Azerbaijan and Cyprus on our Europe maps, as all three will become a part of the EU, or European Union in the future.

Australia/Oceania



Name the Country!

1 _____	8 _____
2 _____	9 _____
3 _____	10 _____
4 _____	11 _____
5 _____	12 _____
6 _____	13 _____
7 _____	14 _____

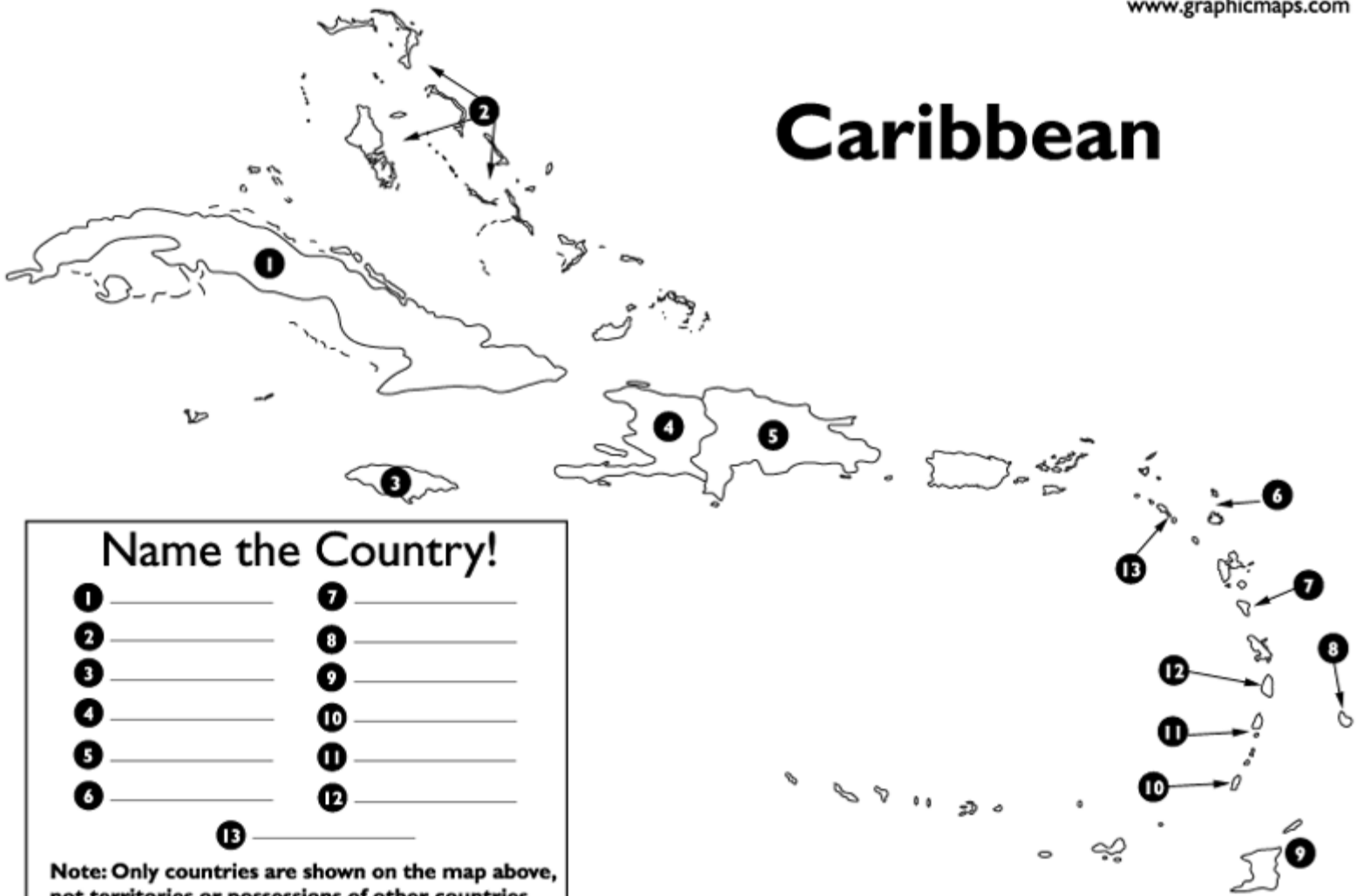
Note: Only recognized countries are shown on the map above, not territories, or possessions of other countries.

Name the Oceania Country!

(ANSWERS)

- | | |
|--------------------|--------------------|
| 1 Australia | 8 Marshall Islands |
| 2 New Zealand | 9 Tuvalu |
| 3 Papua New Guinea | 10 Kiribati |
| 4 Solomon Islands | 11 Samoa |
| 5 Nauru | 12 Vanuatu |
| 6 Palau | 13 Fiji |
| 7 Micronesia | 14 Tonga |

Caribbean



Name the Country!

- | | |
|----------|----------|
| 1 _____ | 7 _____ |
| 2 _____ | 8 _____ |
| 3 _____ | 9 _____ |
| 4 _____ | 10 _____ |
| 5 _____ | 11 _____ |
| 6 _____ | 12 _____ |
| 13 _____ | |

Note: Only countries are shown on the map above, not territories or possessions of other countries.

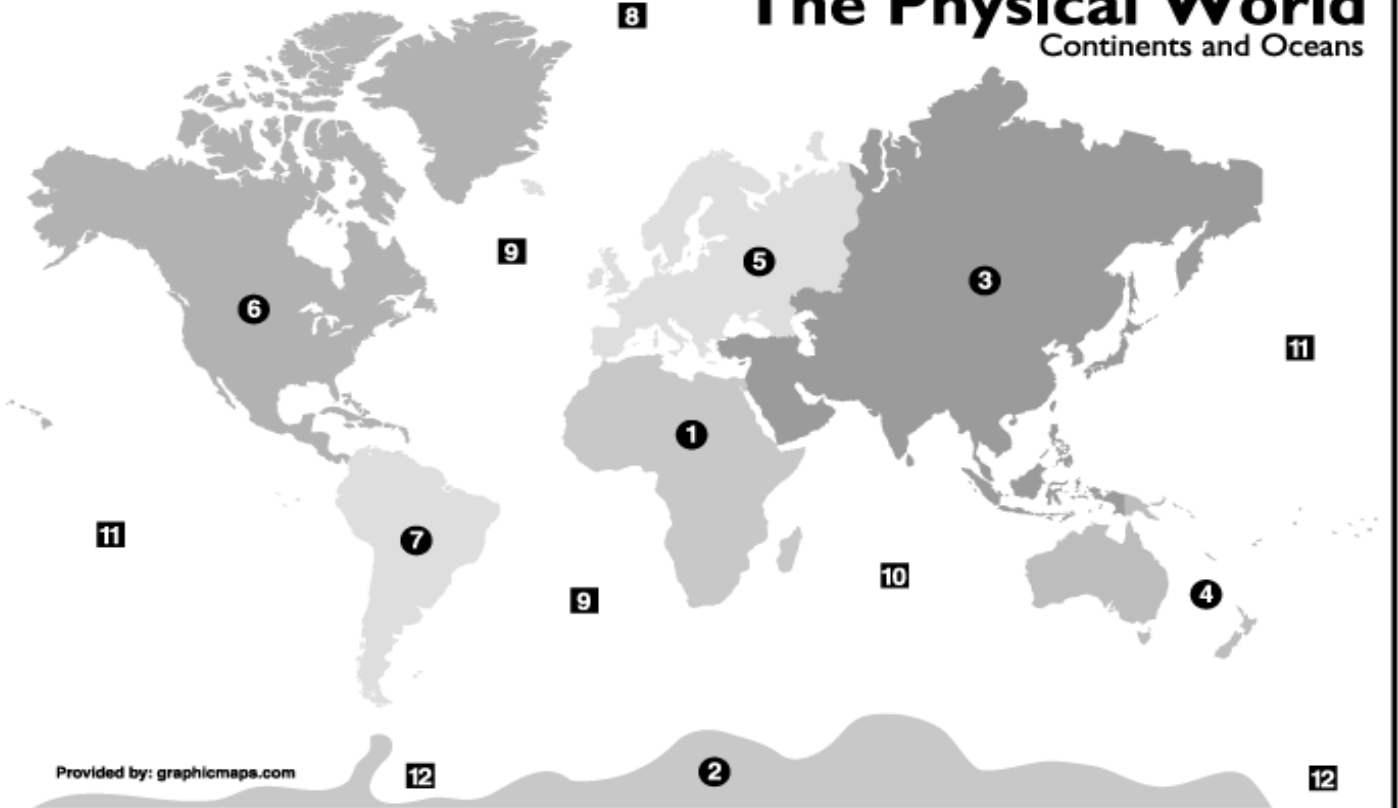
Name the Caribbean Country!

(ANSWERS)

- | | |
|-----------------------|-----------------------------------|
| 1 Cuba | 7 Dominica |
| 2 Bahamas | 8 Barbados |
| 3 Jamaica | 9 Trinidad and Tobago |
| 4 Haiti | 10 Grenada |
| 5 Dominican Republic | 11 St. Vincent and the Grenadines |
| 6 Antigua and Barbuda | 12 St. Lucia |
| 13 St. Kitts & Nevis | |

The Physical World

Continents and Oceans



Name the Continents

- | | | |
|---------|---------|---------|
| 1 _____ | 4 _____ | 6 _____ |
| 2 _____ | 5 _____ | 7 _____ |
| 3 _____ | | |

Name the Oceans

- | | |
|----------|----------|
| 8 _____ | 11 _____ |
| 9 _____ | 12 _____ |
| 10 _____ | |

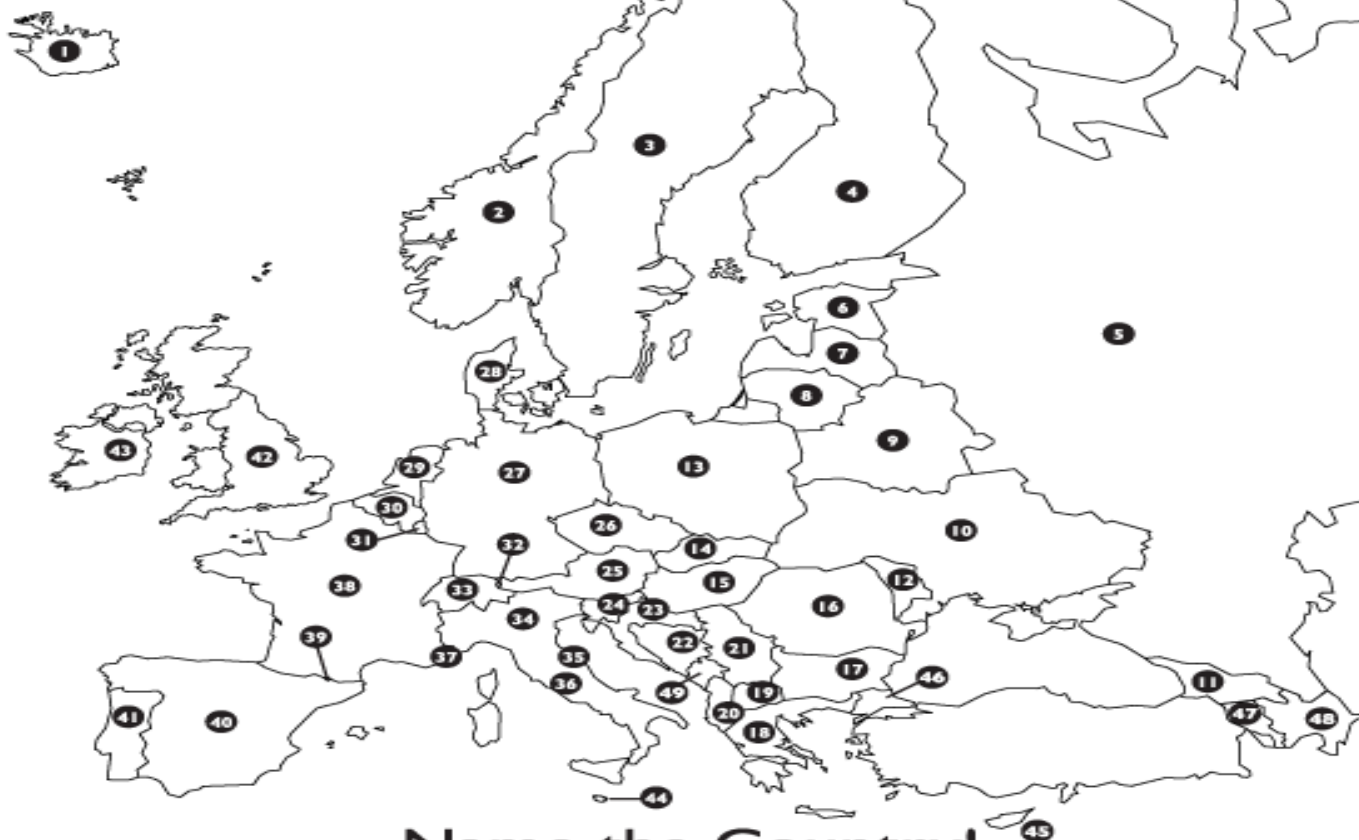
Name the Continents (ANSWERS)

- | | | |
|--------------|---------------------|-----------------|
| 1 Africa | 4 Australia/Oceania | 6 North America |
| 2 Antarctica | 5 Europe | 7 South America |
| 3 Asia | | |

Name the Oceans (ANSWERS)

- | | | |
|------------|------------|-------------|
| 8 Arctic | 10 Indian | 12 Southern |
| 9 Atlantic | 11 Pacific | |

Europe



Name the Country!

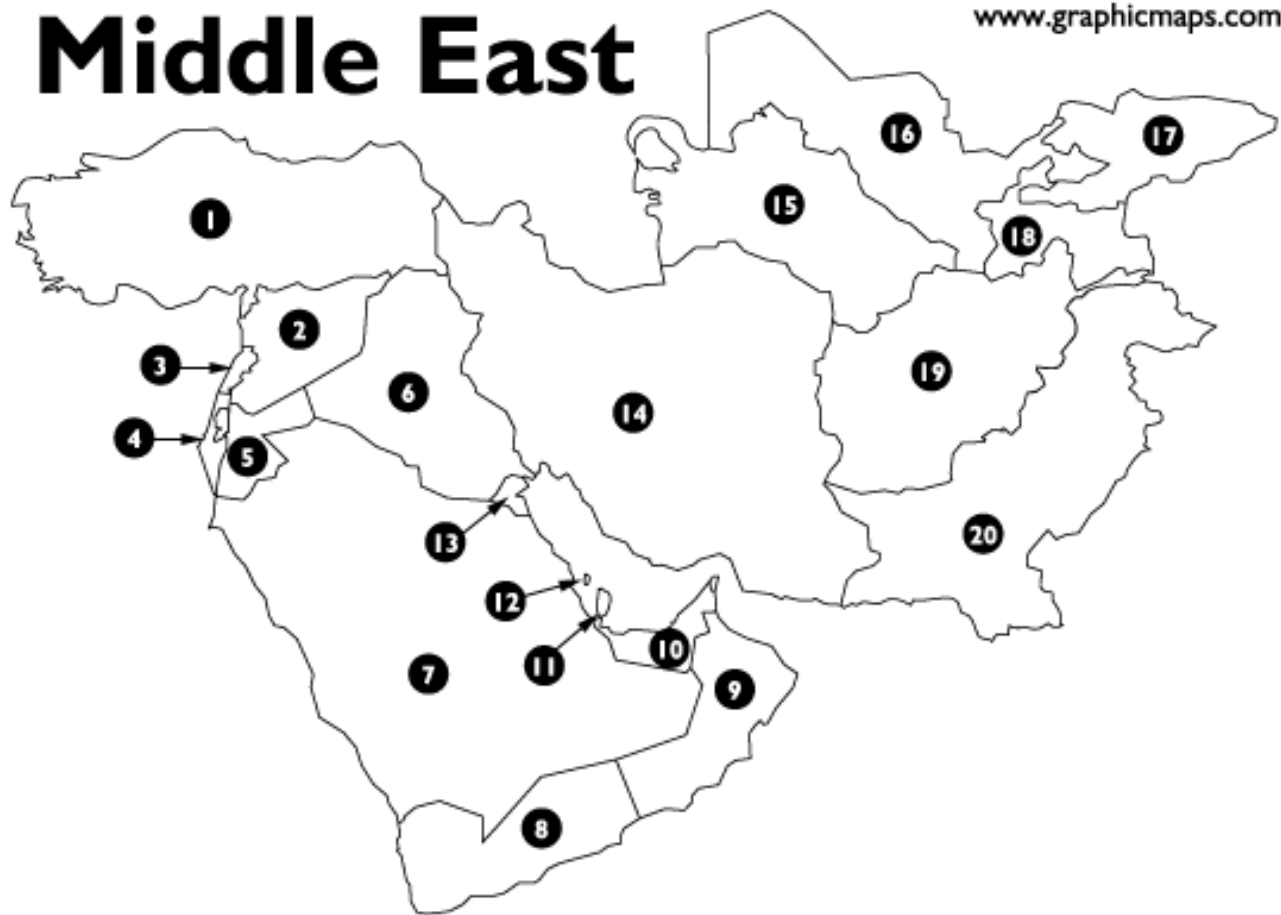
- | | | | |
|----------|----------|----------|----------|
| 1 _____ | 13 _____ | 25 _____ | 37 _____ |
| 2 _____ | 14 _____ | 26 _____ | 38 _____ |
| 3 _____ | 15 _____ | 27 _____ | 39 _____ |
| 4 _____ | 16 _____ | 28 _____ | 40 _____ |
| 5 _____ | 17 _____ | 29 _____ | 41 _____ |
| 6 _____ | 18 _____ | 30 _____ | 42 _____ |
| 7 _____ | 19 _____ | 31 _____ | 43 _____ |
| 8 _____ | 20 _____ | 32 _____ | 44 _____ |
| 9 _____ | 21 _____ | 33 _____ | 45 _____ |
| 10 _____ | 22 _____ | 34 _____ | 46 _____ |
| 11 _____ | 23 _____ | 35 _____ | 47 _____ |
| 12 _____ | 24 _____ | 36 _____ | 48 _____ |
| | | | 49 _____ |

Name the Country of Europe!

(ANSWERS)

- | | | | |
|-------------------|-------------------------|-------------------|-------------------|
| 1 Iceland | 13 Poland | 25 Austria | 37 Monaco |
| 2 Norway | 14 Slovakia | 26 Czech Republic | 38 France |
| 3 Sweden | 15 Hungary | 27 Germany | 39 Andorra |
| 4 Finland | 16 Romania | 28 Denmark | 40 Spain |
| 5 European Russia | 17 Bulgaria | 29 Netherlands | 41 Portugal |
| 6 Estonia | 18 Greece | 30 Belgium | 42 United Kingdom |
| 7 Latvia | 19 Macedonia | 31 Luxembourg | 43 Ireland |
| 8 Lithuania | 20 Albania | 32 Liechtenstein | 44 Malta |
| 9 Belarus | 21 Serbia | 33 Switzerland | 45 Cyprus |
| 10 Ukraine | 22 Bosnia & Herzegovina | 34 Italy | 46 Turkey |
| 11 Georgia | 23 Croatia | 35 San Marino | 47 Armenia |
| 12 Moldova | 24 Slovenia | 36 Vatican City | 48 Azerbaijan |
| | | | 49 Montenegro |

Middle East



Name the Country!

- | | | | |
|---------|----------|----------|----------|
| 1 _____ | 6 _____ | 11 _____ | 16 _____ |
| 2 _____ | 7 _____ | 12 _____ | 17 _____ |
| 3 _____ | 8 _____ | 13 _____ | 18 _____ |
| 4 _____ | 9 _____ | 14 _____ | 19 _____ |
| 5 _____ | 10 _____ | 15 _____ | 20 _____ |

Name the Countries of the Middle East!

(ANSWERS)

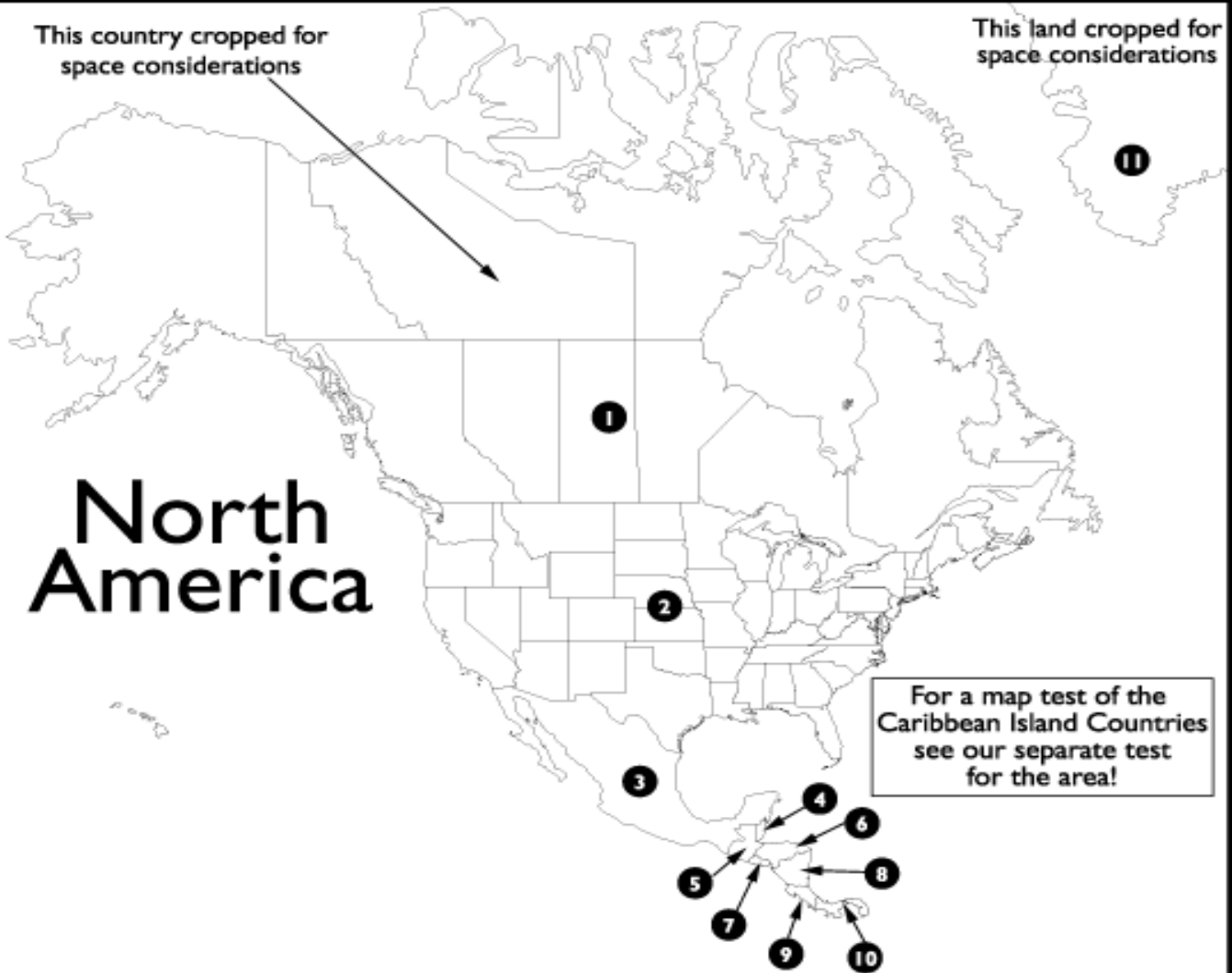
- | | | | |
|-----------|-------------------------|-----------------|----------------|
| 1 Turkey | 6 Iraq | 11 Qatar | 16 Uzbekistan |
| 2 Syria | 7 Saudi Arabia | 12 Bahrain | 17 Kyrgyzstan |
| 3 Lebanon | 8 Yemen | 13 Kuwait | 18 Tajikistan |
| 4 Israel | 9 Oman | 14 Iran | 19 Afghanistan |
| 5 Jordan | 10 United Arab Emirates | 15 Turkmenistan | 20 Pakistan |

NOTE: Based on recent political and economic trends, we now include the former Middle East countries of Armenia, Azerbaijan and Cyprus on our Europe maps and information pages.

This country cropped for space considerations

This land cropped for space considerations

North America



For a map test of the Caribbean Island Countries see our separate test for the area!

Name the Country!

- | | | | |
|---------|---------|---------|----------|
| 1 _____ | 4 _____ | 7 _____ | 10 _____ |
| 2 _____ | 5 _____ | 8 _____ | 11 _____ |
| 3 _____ | 6 _____ | 9 _____ | |

Name the Country of North America

(ANSWERS)

- | | | |
|----------------------------|---------------|--------------|
| 1 Canada | 5 Guatemala | 9 Costa Rica |
| 2 United States of America | 6 Honduras | 10 Panama |
| 3 Mexico | 7 El Salvador | 11 Greenland |
| 4 Belize | 8 Nicaragua | |

Note that Greenland is a territory of Denmark

South America



Name the Country!

- | | | |
|---------|----------|----------|
| 1 _____ | 6 _____ | 11 _____ |
| 2 _____ | 7 _____ | 12 _____ |
| 3 _____ | 8 _____ | 13 _____ |
| 4 _____ | 9 _____ | 14 _____ |
| 5 _____ | 10 _____ | 15 _____ |

Note that #'s 13, 14 and 15 are territories of other countries

Name the Country or Territory!

(ANSWERS)

- | | | |
|------------|-------------|----------------------|
| 1 Colombia | 6 Argentina | 11 Guyana |
| 2 Ecuador | 7 Uruguay | 12 Venezuela |
| 3 Peru | 8 Paraguay | 13 French Guiana |
| 4 Bolivia | 9 Brazil | 14 Falkland Islands |
| 5 Chile | 10 Suriname | 15 Galapagos Islands |

United States of America

Name the State!



1 _____	13 _____	25 _____	37 _____
2 _____	14 _____	26 _____	38 _____
3 _____	15 _____	27 _____	39 _____
4 _____	16 _____	28 _____	40 _____
5 _____	17 _____	29 _____	41 _____
6 _____	18 _____	30 _____	42 _____
7 _____	19 _____	31 _____	43 _____
8 _____	20 _____	32 _____	44 _____
9 _____	21 _____	33 _____	45 _____
10 _____	22 _____	34 _____	46 _____
11 _____	23 _____	35 _____	47 _____
12 _____	24 _____	36 _____	48 _____
49 _____		50 _____	

Name the State!

(ANSWERS)

- | | | | |
|---------------|-----------------|-------------------|------------------|
| 1 Washington | 13 Oklahoma | 25 Illinois | 37 West Virginia |
| 2 Oregon | 14 Kansas | 26 Indiana | 38 Pennsylvania |
| 3 California | 15 Nebraska | 27 Ohio | 39 New York |
| 4 Arizona | 16 South Dakota | 28 Kentucky | 40 Vermont |
| 5 Nevada | 17 North Dakota | 29 Tennessee | 41 New Hampshire |
| 6 Utah | 18 Minnesota | 30 Mississippi | 42 Maine |
| 7 Idaho | 19 Iowa | 31 Alabama | 43 Massachusetts |
| 8 Montana | 20 Missouri | 32 Florida | 44 Rhode Island |
| 9 Wyoming | 21 Arkansas | 33 Georgia | 45 Connecticut |
| 10 Colorado | 22 Louisiana | 34 South Carolina | 46 New Jersey |
| 11 New Mexico | 23 Wisconsin | 35 North Carolina | 47 Delaware |
| 12 Texas | 24 Michigan | 36 Virginia | 48 Maryland |

49 Alaska

50 Hawaii